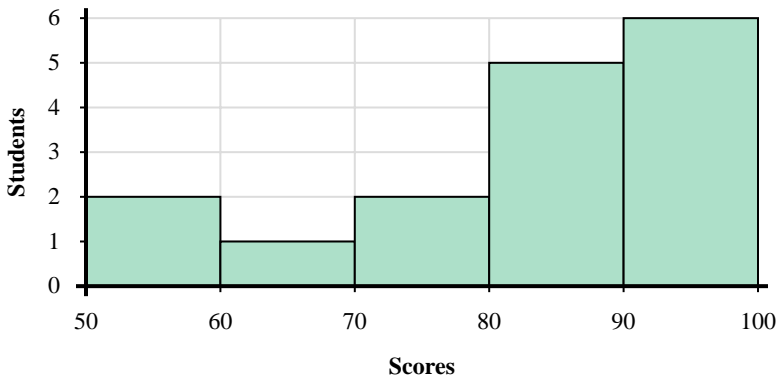


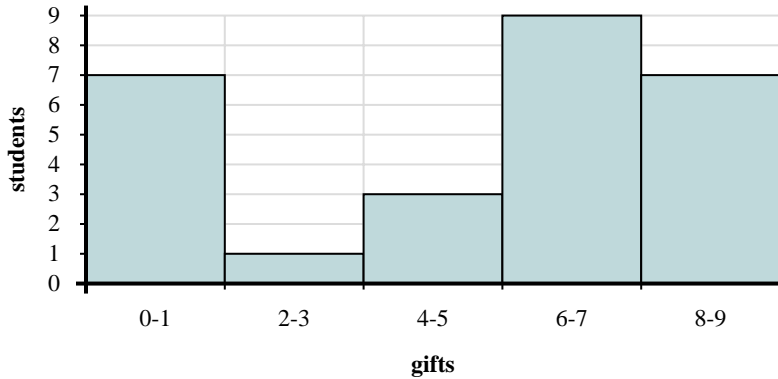
Use the histograms shown to answer each question.



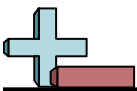
- 1) How many students scored between a 90 and 100?
- 2) Most students scored between a \_\_\_\_\_ and \_\_\_\_\_.
- 3) If a student scored a 54 which bar would they be added to?
- 4) How many students are represented in this histogram?

**Answers**

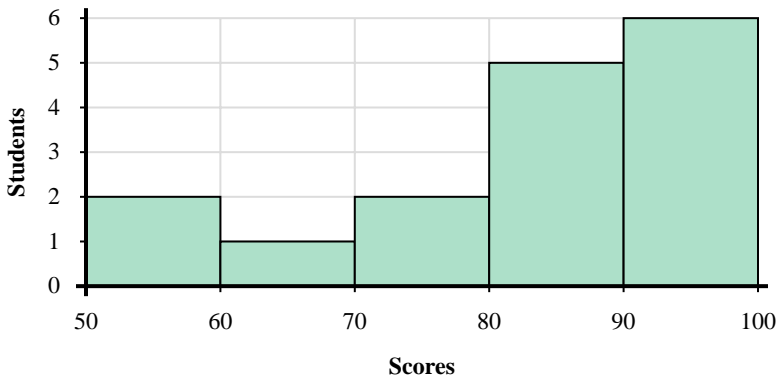
1. \_\_\_\_\_
2. \_\_\_\_\_
3. \_\_\_\_\_
4. \_\_\_\_\_
5. \_\_\_\_\_
6. \_\_\_\_\_
7. \_\_\_\_\_
8. \_\_\_\_\_



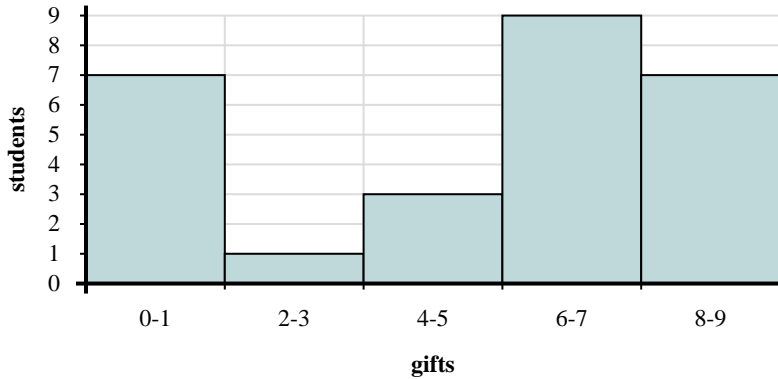
- 5) Most students received between \_\_\_\_\_ and \_\_\_\_\_ gifts.
- 6) How many students are represented in this histogram?
- 7) If a student received 0 gifts which bar would they be added to?
- 8) How many students received between 6 and 8 gifts?



Use the histograms shown to answer each question.



- 1) How many students scored between a 90 and 100?
- 2) Most students scored between a \_\_\_\_\_ and \_\_\_\_\_.
- 3) If a student scored a 54 which bar would they be added to?
- 4) How many students are represented in this histogram?



- 5) Most students received between \_\_\_\_\_ and \_\_\_\_\_ gifts.
- 6) How many students are represented in this histogram?
- 7) If a student received 0 gifts which bar would they be added to?
- 8) How many students received between 6 and 8 gifts?

Answers

1. 6
2. 90 100
3. 1
4. 16
5. 6 8
6. 27
7. 1
8. 9